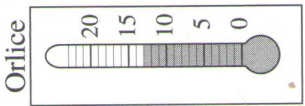
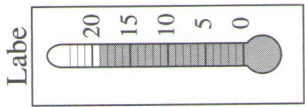
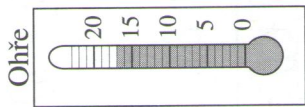
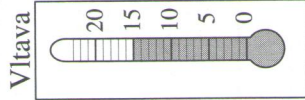


1.

Ráno:



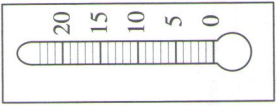

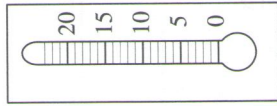
°C

°C

°C

°C

Večer:



°C

°C

°C

°C

2.

$$10 + 7 =$$

$$3 + 10 =$$

$$10 + 1 =$$

$$10 + 8 =$$

$$9 + 10 =$$

$$5 + 10 =$$

$$6 + 10 =$$

$$10 + 9 =$$

$$10 + 3 =$$

$$7 + 10 =$$

$$10 + 6 =$$

$$10 + 10 =$$

$$0 + 10 =$$

$$8 + 10 =$$

$$10 + 5 =$$

$$2 + 10 =$$

$$10 + 0 =$$

$$4 + 10 =$$

1. Přečti a zapiš ranní teplotu vody v řekách. Do večera teplota o 2 °C stoupla.

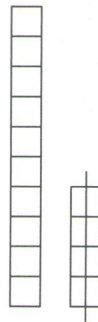
Vyznač a zapiš.

2. Vypočítej.

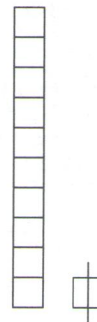
1.



$$10 - 6 =$$



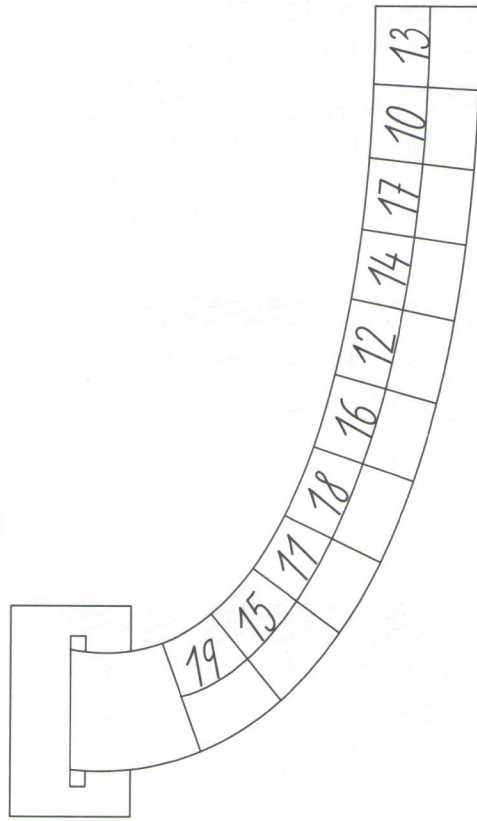
$$14 -$$



2.



Umím jen odčítat 10.



1. Zapišuj příklady.

2. Doplň tabulku.