






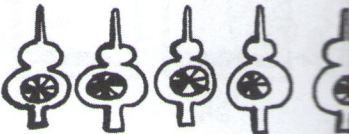


1. Vypočítej a napiš výsledek.

 + 
$5 + 2 = \underline{\quad}$

 + 
$3 + 3 = \underline{\quad}$

 + 
$1 + 6 = \underline{\quad}$

 + 
$2 + 5 = \underline{\quad}$


$4 + 3 = \underline{\quad}$


$4 + 1 = \underline{\quad}$


$7 + 0 = \underline{\quad}$


$3 + 3 = \underline{\quad}$


$5 + 2 = \underline{\quad}$


$4 + 2 = \underline{\quad}$


$6 + 1 = \underline{\quad}$


$2 + 3 = \underline{\quad}$