




Vypočítej a napiš výsledek.



$$7 - 3 =$$



$$7 - 5 =$$



$$7 - 2 =$$

Škrtni kolečka a vypočítej.

$$7 - 1 =$$



$$7 - 4 =$$



$$7 - 6 =$$



$$7 - 7 =$$



$$7 - 0 =$$



$$7 - 3 =$$



$$7 - 5 =$$



$$7 - 2 =$$

